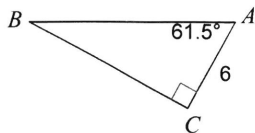


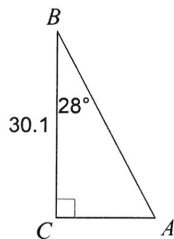
## Right Triangle Trigonometry

Solve each triangle. Round answers to the nearest tenth.

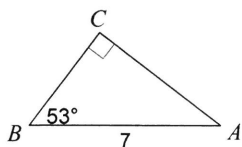
1)



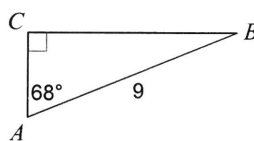
2)



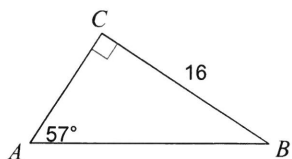
3)



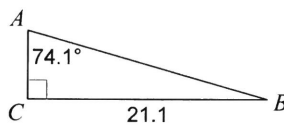
4)



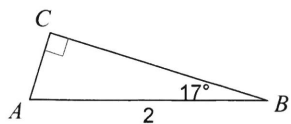
5)



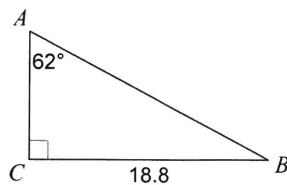
6)



7)



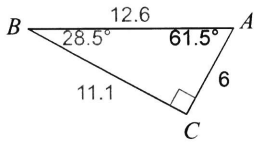
8)



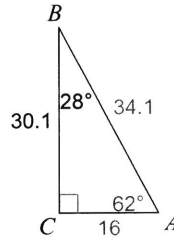
# Right Triangle Trigonometry

Solve each triangle. Round answers to the nearest tenth.

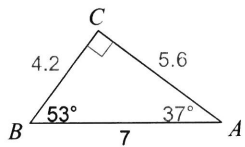
1)



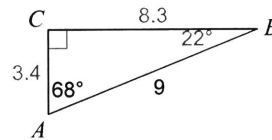
2)



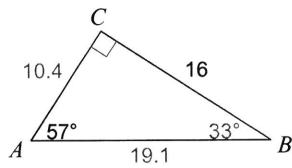
3)



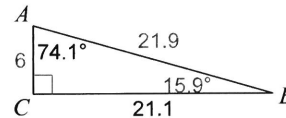
4)



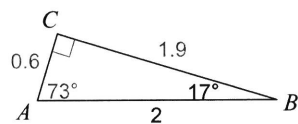
5)



6)



7)



8)

